



PassthePaper™

11+ and Independent Mock Papers


www.passthepaper.co.uk

Non-Verbal Reasoning Sample Paper


Please use the answer sheet provided and work as quickly and accurately as you can.

In the following question, study the code to decipher which label should be on the final shape.

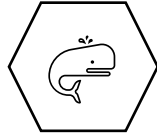
Q1.



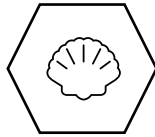
1,3




1,2



4,5



4,3



a) 1,3

b) 4,1

c) 4,2

d) 1,4

e) 1,5

In the following question, study the shapes carefully to identify the odd one out.

Q2.



A



B



C




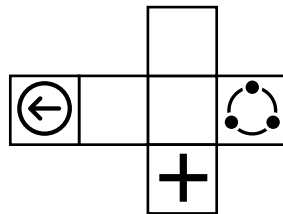
D



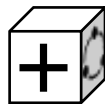
E

For the following question, identify the cube that *cannot* be constructed from the net provided.

Q3.



A



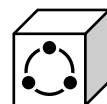
B



C



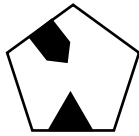
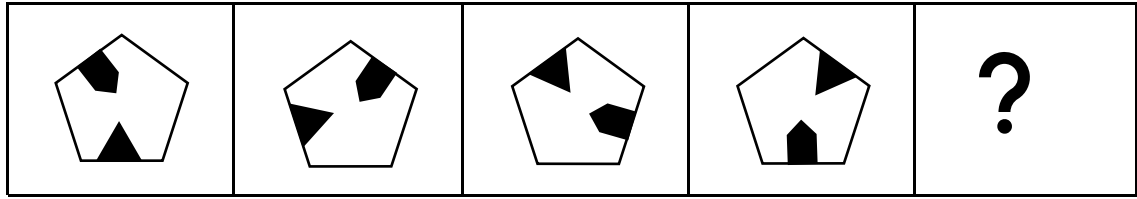
D



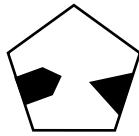
E

For the following question, identify the shape that correctly matches the missing or next part of the sequence.

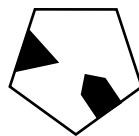
Q4.



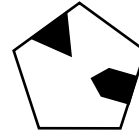
A



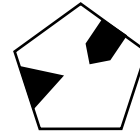
B



C



D



E

-End of test, now go back and check your answers-

Answer Sheet

Please place an x in the bracket of the right answer.

E.g.

Q.0	a. []	b. []	c. [x]	d. []	e. []
-----	--------	--------	--------	--------	--------

Q.1	a. []	b. []	c. []	d. []	e. []
Q.2	a. []	b. []	c. []	d. []	e. []
Q.3	a. []	b. []	c. []	d. []	e. []
Q.4	a. []	b. []	c. []	d. []	e. []

Answers

Q.1	C
Q.2	E
Q.3	D
Q.4	B